



### CLASS-III

#### Subject- English

1. Nina lost the race. But the title of the story says 'Nina is the winner'. In what way is she a winner?
2. How can you help others in the following situations:
  - a) When you see a child crying with hunger on your way to school.
  - b) An elderly woman falls on the road and her articles in the bag get scattered.
3. How do you finally resolve the issue with your brother/sister? Do you think peaceful means are better to solve the problems or fighting solves the purpose better? Why?
4. What Sudama felt when he returned and saw a beautiful house in place of his hut?
5. What is a sentence? Give examples.
6. Form questions of the given statements using the question words given in the brackets:
  - a) The train will arrive at 04:30 pm. (When)
  - b) Yes, I have done my homework. (Have)
  - c) I am seven years old. (How)
  - d) I go to school by bus. (How)
7. Write a letter to your cousin inviting him/her to spend a week with you in vacation

#### Subject- Hindi

1. प्रकृति से संबंधित कोई एक कविता लिखें।
2. दस पालतू तथा दस जंगली पशुओं के नाम लिखें।
3. नीचे दिए गए अनुच्छेद को पूरा करें -

लाल बहादुर शास्त्री जी का जन्म..... तिथि को हुआ। उनका बचपन का नाम..... था।

वे बचपन से ही ..... थे। वह भारत के..... बने। उन्होंने ..... का नारा दिया।

(नन्हे, ईमानदार, 2 अक्टूबर 1904, जय जवान जय किसान, दूसरे प्रधानमंत्री)

4. दिए गए शब्दों के अर्थ लिखें -

अंधकार -

प्रातः -

बेला -

जोश -

दुर्गुण -

अलसा -

अवस्था -

प्रयत्न -

नौ दो ग्यारह होना -

आजीवन -

सौँपा -

### परियोजना कार्य

पाँच स्वतंत्रता सेनानियों का चित्र बनाकर अथवा चिपकाकर उनके बारे में 4 से 5 पंक्तियां लिखें ।

(चार्ट पेपर पर बनाएँ)

### **Subject – Maths**

1. Solve the following: -

(a) 2 kg =  $2 \times$  \_\_\_\_\_ g

(b) 11 kg = \_\_\_\_\_ g

(c) 4 m =  $4 \times$  \_\_\_\_\_ g

(d) 7 km =  $7 \times$  \_\_\_\_\_ m

2. Arrange in columns and subtract: -

a) ₹ 0.07 from ₹ 19.00

b) 55 paise from ₹ 13.00

3. Arrange in column and add

a) 370 kg 725g and 216 kg 173 g

b) 93 km 203 m and 39 km 101 m

4. Arrange and add the following amount of money

a) ₹ 0.97, ₹ 0.09 and 1.09

b) ₹ 93.25 and ₹ 64.65

5. Convert each into rupees and paise: -

a) 7200 paise

b) 4050 paise

c) 6525 paise

d) 350 paise

6. Answer the following with the help of calendar: -

June						
Sunday	Monday	Tuesday	Wednesday	Thursday	Friday	Saturday
				1	2	3
4	5	6	7	8	9	10
11	12	13	14	15	16	17
18	19	20	21	22	23	24
25	26	27	28	29	30	

1. On which day of the week did June start?
2. How many whole weeks (Sunday to Saturday) were there in this month?
3. How many weekends were there in this month?
4. What is the month after June?
5. Which days appear five times in June?
6. What day of the week is the day before the 14<sup>th</sup> June?
7. Which day of the week comes after the 17<sup>th</sup> June?
8. What date is the last Saturday in June?

7. A roll of electric wire contains 88m 75cm of wire. If 46m and 55 cm of the wire is used how much wire is left in the roll?
8. A housewife bought 2kg 350g potatoes and 1kg 100g tomatoes. Find the total weight of the vegetables she bought.
9. Nakul got ₹ 50 as pocket money from his father. He bought a story book for ₹ 16.50. How much pocket money is left in his pocket.
10. From a book fair, Arun purchase three books costing ₹ 15.50, ₹26.50 and ₹5.50, if he pays ₹50 how much balance will he get back? back

11. **Peter purchased the following items from the Super Market.**

Toilet Soap	₹ 24.00
Shaving Cream	₹ 52.50
Toothpaste	₹ 47.50
Hair Oil	₹ 76.00
Cold Cream	₹ 92.50

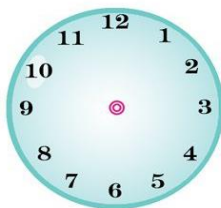
**Prepare a cash memo and find the total amount paid by him.**

12.

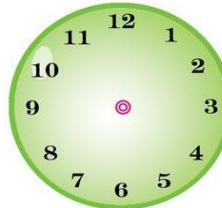
Draw the hands of the clocks according to the time.



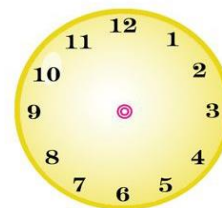
3 o' clock



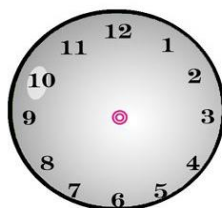
10 o' clock



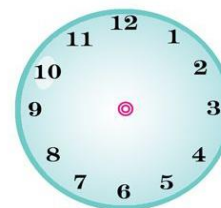
12 o' clock



1 o' clock



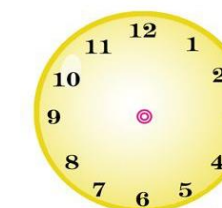
Half past 7



Half past 3



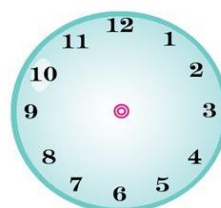
Half past 9



Half past 2



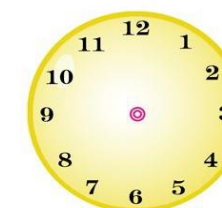
Quarter past 6



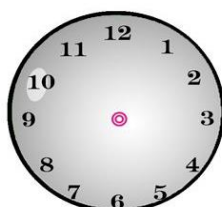
Quarter past 2



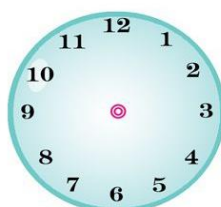
Quarter past 9



Quarter past 10




Your walking time



Your School starts at



Your School finishes at



Your Sleeping time

## PROJECT WORK

Prepare a chart of Indian currencies with images (coins and notes) on chart paper.

## Subject- Science

A. Fill in the blanks: -

1. We like munching..... in winters.
2. Mint gives..... to our food.
3. ....is a green vegetable.
4. Potato is a .....stem.
5. Carrot is a ....., it can be eaten raw.
6. Pulses are prepared by..... them in water.
7. Idli can be cooked by ..... obtained by boiling water.
8. .... are often cooked by direct heating on fire.
9. Biscuits and breads are prepared by baking in an..... .
10. Vegetables like carrots and radish are often eaten in their..... form.

- B. Write true or false for the following statements:
1. There are many different methods of cooking food
  2. Pulses are generally cooked in a pressure cooker.
  3. Consuming a lot of fried food is good for our health.
  4. Some vegetable Sajan rally eaten without cooking them.
  5. Egg can be cooked by boiling.
- C. Answer the following questions in brief:
1. How is baking done?
  2. List the methods of cooking which require water.
  3. In what form early man used to eat food?
  4. Why do we need to eat nuts?
  5. How do we obtain wheat flour?
- D. Answer the following questions:
1. What kind of food is preferred by old people?
  2. Why are green vegetable and fruits important for us?
  3. Differentiate between boiling and frying.
  4. What can happen to vegetables when they are over cooked?
  5. Why are milk and milk products regarded as good food for one and all?
- E. Match the following:
- |              |                    |
|--------------|--------------------|
| 1. Radish.   | a. seed            |
| 2. almond    | b. leaf            |
| 3. Ginger    | c. Root            |
| 4. coriander | d. fruit           |
| 5. melon.    | e. stem            |
| 6. pulses.   | f. a metal bowl    |
| 7. idli      | g. griddle (tava)  |
| 8. cake      | h. pressure cooker |
| 9. chapati   | i. steamer         |
| 10. eggs.    | j. oven            |

## Sub:-Social Science

- 1) Fill in the blanks with the help of correct words:-
- i) The early man ate \_\_\_\_\_ of animals.
  - ii) \_\_\_\_\_ are made of bamboo, strew, dried leaves and mud.
  - iii) \_\_\_\_\_ do not live permanently at one place.
  - iv) Houses on seashores are made with \_\_\_\_\_ proof materials.
  - v) wood keeps a house warm in \_\_\_\_\_ weather.
- 2) Match the following correctly
- |                           |                      |
|---------------------------|----------------------|
| 1) wiping floor's.        | a) coop              |
| 2) walls                  | b) curtains          |
| 3) Doctor treating animal | c) paint             |
| 4) Doors and windows.     | d) veterinary doctor |
| 5) Hen.                   | e) mop               |

3) Answer the following questions:-

- i ) How do you keep your home clean?
  - ii) who is responsible for garbage removal in your area?
  - iii) Mention three places that can become breeding ground of mosquitoes?
  - iv) why is it important to know directions?
  - v) what is a compass? How does it help us?
  - vi) what can happen if you do not understand directions?
  - vii) What guided the sailors at sea in olden times?
- 4) On a chart paper draw a beautiful home or with the help of thermocol draw a model of a beautiful home.
- 5) On a chart paper draw the following
- a) compass with two types of directions.
  - b) Two means of transport and write few lines on them.
- 6) Write names of all family members and ask hobbies of them also write benefits of hobbies.
- 7) Collect pictures of different types of houses and paste them.
- 8) Draw /paste a political map of India and write name of states.
- 9) Write the name of all states and capitals in copy.

## **Subject- Computer**

1. What do you mean by keyboard? Write the different types of keys on the keyboard.
2. Write the number of keys on the keyboard: -
  - a) Alphabet keys
  - b) Number keys
  - c) Shift key
  - d) Enter key
  - e) Spacebar key
  - f) Function key
  - g) Esc key
  - h) Total number of keys
3. Write the use of the following keys: -
  - a) Enter Key
  - b) Spacebar key
  - c) Arrow Key
4. Write the steps to open WordPad.
5. What is Touch Typing?



## Subject- Drawing

SL.NO.	CLASS	ASSIGNMENT
1.	III	CREATE A SEA SCAPE BY PAPER CRAFT



## Subject: Music

1. WRITE AND LEARN THE FOLLOWING PRAYER IN YOUR MUSIC COPY.

(1) ITANI SHAKTI HAME DE NA DATA

(2) DAYA KAR DAN BHAKTI KA

(3) AE MALIK TERE BANDE HUM

(4) DAV SONG

(5) VANDE MATRAM

2. WRITE THE PRAYER “SUABAH SAVERE LEKAR TERA NAM PRABHU” IN CHART PAPER & DECORATE THEM.