



# SD DAV PUBLIC SCHOOL, JAMTARA

## Summer Vacation Assignment (2024-25)

### Class: - VI

### Subject: English

#### Summer Vacation Home Assignments

1. Little Daddy wanted to pursue various professions. Complete the table below citing one reason for his choice of these professions: Page 4 English Literature Book
2. Little Daddy thought—
  - A. If he were a nightwatchman, he would keep awake all night and make a noise.
  - B. If he were an ice-cream seller, he would eat all the ice-cream he wanted to.
  - C. If he were a shunter, he would jump on to the platforms and crawl under the cars.Now think of yourself an architect, a detective, a cricketer, a mariner, a dress designer and write one by one what would you do in such situations as per the examples cited above.
3. Collect more information about Alexander Raskin, Ruskin Bond, W.H.Davies and their pictures. Stick their pictures and write about them.
4. On behalf of the mother elephant, write a request letter to the king pleading for the release of her son.
5. Imagine yourself to be the king. Deliver a speech to your countrymen highlighting the importance of love for animals and condemning man's cruel treatment of animals.
6. Complete the pages 6 to 9 of English Practice Book in your copy( based on adverb ).

Examples: Adjective Adverb

Quick- quickly

Quiet- quietly

He left the room in hurry.

He left the room hurriedly.

She packed the bag with care.

She packed the bag carefully.

Collect suitable pictures from English Newspaper based on different professions, cruelty towards animals, leisure time can be spent by making a tour to hill stations and sea beaches. Paste at least 10 pictures on big chart paper.

### विषय- हिंदी

1. अनुस्वार और अनुनासिक का प्रयोग करते हुए 20-20 शब्दों को लिखें।
2. महिपाल सिंह से जुड़ी महत्वपूर्ण बातें 15 पंक्तियां लिखें, जो हमारे लिखावट को सुधारने में उपयोगी हो।  
परियोजना कार्य :-
3. साहिर लुधियानवी जी का जीवन परिचय एवं प्रसिद्ध कविता तथा गजलें सुंदर लिखावट के साथ ( स्टिक फाइल में ) लिखें।
4. सर्वनाम की परिभाषा व उसके भेदों को विस्तार पूर्वक चार्ट पेपर में लिखें।

### SUBJECT: -SANSKRIT

१. पाठ--१ से प्रश्नोत्तर, अर्थ, शब्दार्थ, और वर्ण-- विन्यास समझें तथा याद करें।
२. पाठ--२ और ३ का अर्थ, शब्दार्थ और प्रश्नोत्तर याद करें।

३. व्याकरण ---तत् ,एतत् ,तथा किम् , शब्द रूपों को तीनों लिंगों में , सातों विभक्तियों तथा तीनों वचनों में याद करें तथा लिखें।
४. कारक के नाम ,चिह्न , तथा विभक्ति याद करें तथा लिखें।
५. अनुच्छेदं पठित्वा प्रश्नानाम् उत्तरत ----  
मम विद्यालयः विशालः अस्ति ।अहं विद्यालये प्रतिदिनं पाठं पठामि ।  
अहं विद्यालये लेखम्अपि लिखामि । विद्यालये मम अनेकानि मित्राणि सन्ति ।  
अहं मित्रैःसह क्रीडामि ।

एकपदेन उत्तरत -----

- (क) अहं प्रतिदिनं कुत्र पठामि? (ख)विद्यालये अहं किं लिखामि ?  
(ग) विद्यालये कस्य मित्राणि सन्ति? (घ)अहं कैः सह क्रीडामि?  
(ङ) विद्यालयः कस्य विशालः अस्ति?

६. अनुच्छेदं पठित्वा प्रश्नानाम् उत्तरत ----

एकदा हरिणः दूरं गच्छति । सायंकालः भवति ।परन्तु सः न आगच्छति ।  
मूषकः ,काकः , कच्छपः , च प्रतीक्षा न कुर्वन्ति । ते परस्परं वार्तालापं  
कुर्वन्ति ?

पूर्णवाक्येन उत्तरत -----

- (क) कः दूरं गच्छति? (ख) कः न आगच्छति?  
(ग) के प्रतीक्षां कुर्वन्ति ? (घ) केपरस्परं वार्तालापं कुर्वन्ति?

७. परियोजनाकार्यम् -----विद्यालय का चित्र बनायें तथा विद्यालय के वारें में ,पाँच वाक्य संस्कृत में लिखें।

## **SUBJECT: -MATHS**

- Q1. Add 718662 to 360895. Now add 360895 and 718662. Are the two results same? Write the property used here.
- Q2. Form the smallest 6- digit number using the digits 4,5,0.
- Q3. Find the next three successor of 647999.
- Q4. If the cost of one burger is Rs. 50.50, what will be the cost of 25 such burgers?
- Q5. Find the product of  $1009 \times 1392$  by using distributive property.
- Q6. Find the least number that should be subtracted from 1000 so that 35 divides the difference exactly.
- Q7. Round 4,25,163 to the nearest hundred, ten thousand, lakh.
- Q8. Form the greatest 6- digit number using the digits of prime numbers between 80 and 100.
- Q9. Estimate:-  $234 + 649 - 186$
- Q10. Subtract and check :-  $77426 - 71236$
- Q11. The price of a car is Rs. 3,76,866. If it is increased by Rs. 42,049. Find the new price of the car.
- Q12. Solve and write the result in Roman numeral 216-174.
- Q13. Write the year in which India became Republic in Roman numerals.
- Q14. Write the predecessor of 80115670.
- Q15. Rearrange and add using property:-  
 $225 + 725 + 275 + 275$
- Q16. Divide and check :-  $2781 \div 35$
- Q17. Rearrange and multiply:-  $8 \times 25 \times 125 \times 40$
- Q18. Find the largest 5- digit number which is exactly divisible by 40.
- Q19. Round 21.472 to the nearest hundredth.
- Q20. Write the Roman Numerals corresponding to Hindu Arabic Numerals on chart paper.

## Subject: Social Science (History)

Q. Tick the correct option.

1. Kautilya wrote the book–  
a) Meghdoot            b) Arthshastra            c) Ramayan            d) Ttarasshacharita.
2. The period when art of writing was unknown is called–  
a) Prehistory            b) Ancient history            c) Medieval history            d) Modern history.
3. The study of coin is known as–  
a) Architecture            b) Numismatics            c) Calligraphy
4. Who is the author of Abhigyan shakuntalam?  
a) Kautilya            b) Justilas            c) Mahatma Buddha            d) Kalidas
5. The Chinese traveller who visited India was–.  
a) Alexander            b) Columbus            c) Megasthenes            d) Fa-hein

Q. Answer the following questions in briefly–

1. What is the literary sources of Indian history?
2. Define monuments.

D. Answer the following questions–

1. How does the study of coin help the historians?
2. What were the beliefs of Neolithic man about life?

Q. **Map skill**

On the outline political map of India locate, and label the following–

- a. One of the cities of Harappan civilization.
- b. One place of Ashokan inscription in found.
- c. Place where Red Fort is situated.
- d. One of the archaeological sites.

## (GEOGRAPHY)


Q. Answer the following questions in brief.

1. What do we call a huge cluster of billions of stars?
2. Which one of the following is the hottest planet?
3. Which is the most distant planet from the Sun?
4. The planet which does not have any satellite is-
5. Which planet has two satellites?

Q. Answer the following questions.

1. What is a dwarf Planet? Give examples also.
2. What are terrestrial Planets?
3. Write a short note about ISRO?
4. How was the earth formed?
5. What are constellations?
6. Write the rotation and revolution time of eight planets.
7. When was the Mars Orbiter Mission launched by India? What are its achievements?
8. Make a sketch diagram of your locality.

## Social Science Project:-


Take any five different coins  of free India. Study them carefully. List the information that you can get from them like the metal, dates, language, pictures, denomination or any other information in a scrapbook.

## SUB: SCIENCE

1. Differentiate between with one example each-
2. Autotrophs and heterotroph
3. Decomposers and scavengers
4. Biodegradable and Non-biodegradable materials
5. Why do buffaloes cool themselves in water during summer?

- Draw a diagram that shows the relationship between Biotic and the Abiotic Components of the Environment.
- Give one example of terrestrial and aquatic food chain.
- Draw a diagram that shows that Nature tries to maintain a balance between Oxygen and Carbon-dioxide.

6. The waste segregation methods, adopted by two neighbours, Ramesh and Suresh, are shown here in the form of the pie charts. Study the pie charts carefully and answer the questions that follow.

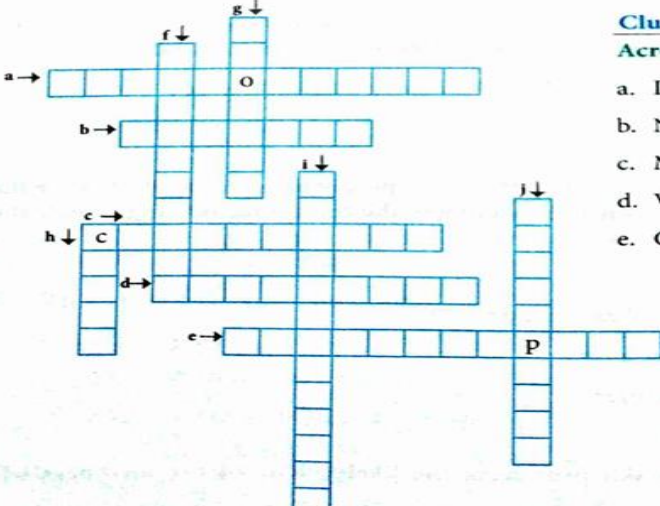


Waste disposed off by Ramesh

Waste disposed off by Suresh

- Name the two items of waste, disposed off by Ramesh, that needs to be separated from one another.
- Identify the biodegradable materials disposed off by Suresh.
- Of the two, who, according to you, is more eco-friendly and why?

7. Solve the following crossword puzzle with the help of given clues.



**Clues**

**Across →**

- Do not make their own food.
- Non-living components.
- Meat eaters.
- Vulture is a \_\_\_\_\_.
- Compost prepared by worms.

**Down ↓**

- Plant eaters.
- Morning glory.
- A desert animal.
- Decomposable material.
- Helps in recycling of minerals.

- Suggest any five activities that can help to save the environment.
- What is photosynthesis? Write equation for photosynthesis.
- What is Vermicomposting? What is Vermicompost?

**Activity 1**

11. A zoo feeder wants to segregate the animals, listed below, into three groups, on the basis of the types of food they eat.

giraffe | lion | bear | leopard | chimpanzee | tiger | elephant | panda | deer | crocodile | rhinoceros | cheetah | hippopotamus | fox | kangaroo

Help the zoo feeder to organise the animals, into the three groups, listed below.

Herbivores	Carnivores	Omnivores

## **कक्षा - VI (नैतिक शिक्षा)**

पाठ एक- प्रार्थना - कॉपी में लिखें तथा याद करें।

पाठ दो - बोल - बोल कर तीन बार पढ़ें तथा प्रश्नों के उत्तर कॉपी में लिखें।

प्रोजेक्ट (क्रियाकलाप) - - प्रार्थना कविता चार्ट पेपर पर लिखें।

## **Subject: Computer**

1. What do you mean by hardware and software. Give examples.
2. Explain different types of system software.
3. Explain the functions of Operating System.
4. What is Anti-virus? Give examples
5. Explain General-purpose and Specific Purpose Application Software.

## **Note**

1. Write 10 Pages in Hindi as Hand Writing (Home Work).
2. Write 10 Pages in English as Hand Writing (Home Work).

## **Subject: GK**

1. Write page no- 1,2 and 3 in copy
2. Write any 10 languages spoken in our country.